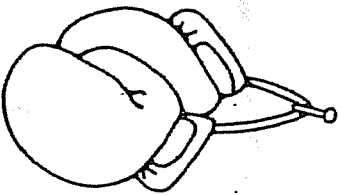
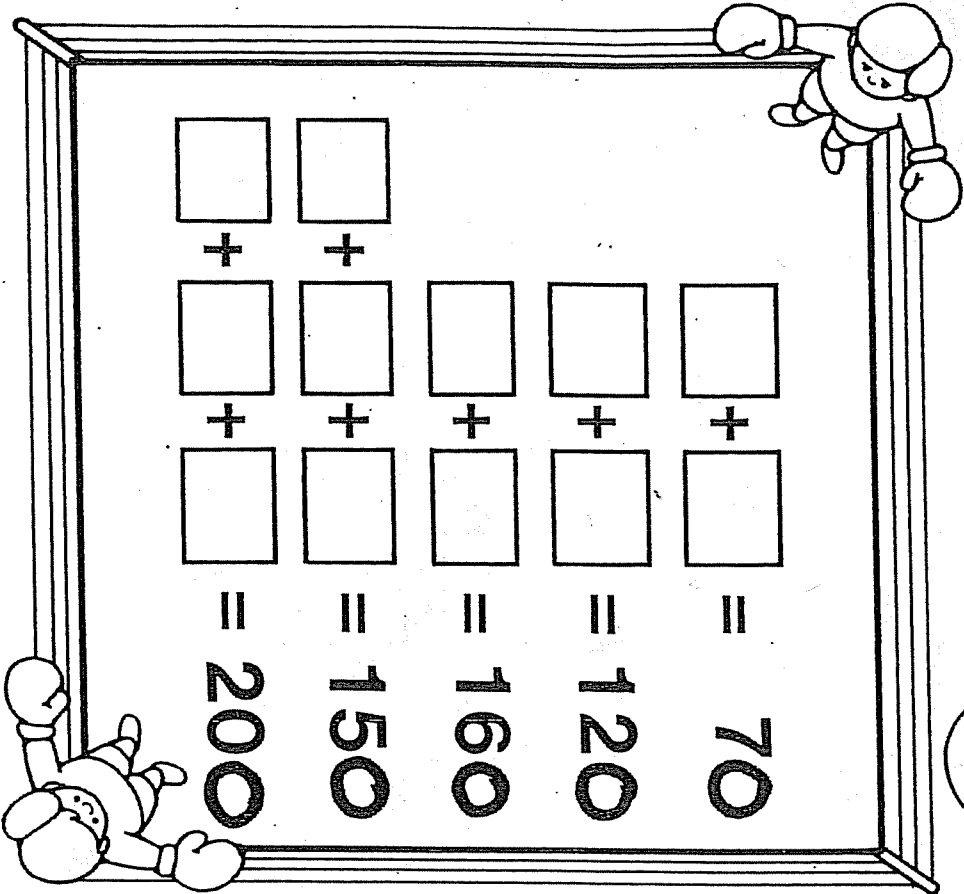


BOXING MATCH

NAME _____

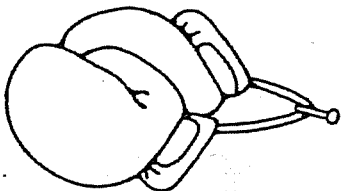


<input type="text"/>	+	<input type="text"/>	=	70
<input type="text"/>	+	<input type="text"/>	=	120
<input type="text"/>	+	<input type="text"/>	=	160
<input type="text"/>	+	<input type="text"/>	=	150
<input type="text"/>	+	<input type="text"/>	=	200



BOXING MATCH

NAME _____



<input type="text"/>	+	<input type="text"/>	=	70
<input type="text"/>	+	<input type="text"/>	=	120
<input type="text"/>	+	<input type="text"/>	=	160
<input type="text"/>	+	<input type="text"/>	=	150
<input type="text"/>	+	<input type="text"/>	=	200

