


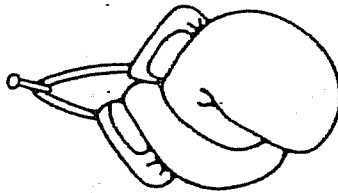
# BOXING MATCH



NAME \_\_\_\_\_

$\square + \square = 70$   
 $\square + \square = 120$   
 $\square + \square = 160$   
 $\square + \square = 150$   
 $\square + \square = 200$

# BOXING MATCH

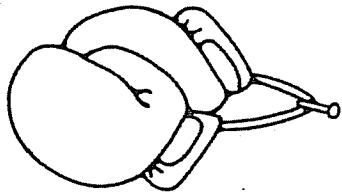


NAME \_\_\_\_\_

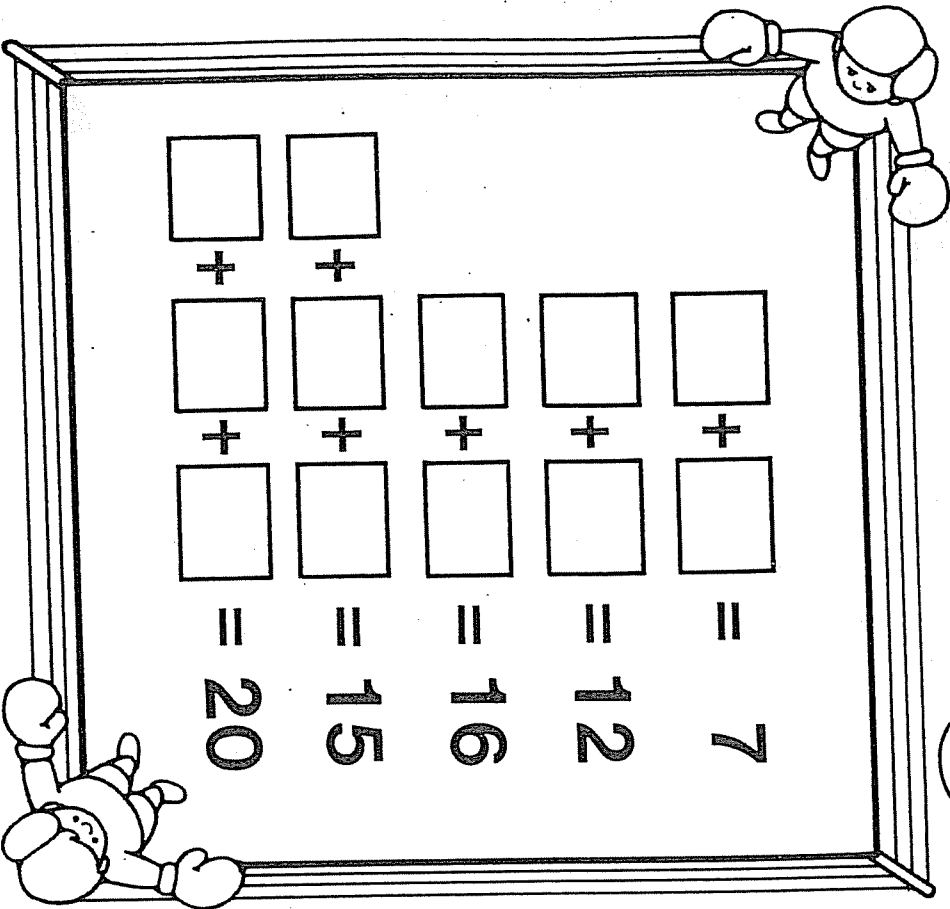
$\square + \square = 70$   
 $\square + \square = 120$   
 $\square + \square = 160$   
 $\square + \square = 150$   
 $\square + \square = 200$

# BOXING MATCH

NAME \_\_\_\_\_

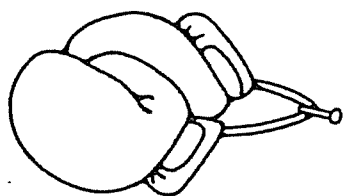


<input type="text"/>	+	<input type="text"/>	=	7
<input type="text"/>	+	<input type="text"/>	=	12
<input type="text"/>	+	<input type="text"/>	=	16
<input type="text"/>	+	<input type="text"/>	=	15
<input type="text"/>	+	<input type="text"/>	=	20



# BOXING MATCH

NAME \_\_\_\_\_



<input type="text"/>	+	<input type="text"/>	=	7
<input type="text"/>	+	<input type="text"/>	=	12
<input type="text"/>	+	<input type="text"/>	=	16
<input type="text"/>	+	<input type="text"/>	=	15
<input type="text"/>	+	<input type="text"/>	=	20

